



Task Title: Check the Temperature on an Outdoor Thermometer

OALCF Cover Sheet – Learner Copy

Learner Name: _____

Date Started: _____

Date Completed: _____

Successful Completion: Yes No

Goal Path: Employment Apprenticeship

Secondary School Post Secondary Independence

Task Description: Learner will check the temperature on various outdoor thermometers.

Main Competency/Task Group/Level Indicator:

- Understand and Use Numbers/Use measures/C3.1

Materials Required:

- Pen/pencil and paper and/or digital device

Task Title: CheckOutdoorTemperature_I_C3.1


Learner Information

Individuals use outdoor thermometers to check what the temperature is outside.

Work Sheet

Task 1: What is the temperature in Celsius on this outdoor thermometer?

Answer:



Task 2: What is the temperature outdoors on this digital thermometer?

Answer:



Task 3: What is the temperature outdoors on this thermometer?

Answer:




Task 4: In the summer, Toronto sometimes has a high of 27 °C. On the same day, Toronto may have a low of 19 °C.


- a) Draw a line on the thermometer on the left to show the high of 27 °C.**
- b) Draw a line on the thermometer on the right to show the low of 19 °C.**

Answer:

Temperature



Temperature



Task 5: Calculate the difference in temperature between the high (27C) and the low (19C) in Toronto.

Answer:
